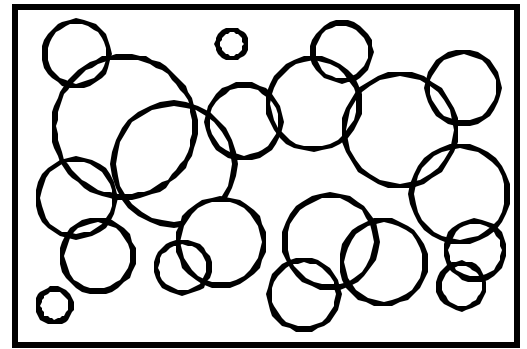


Name: _____ Date: _____

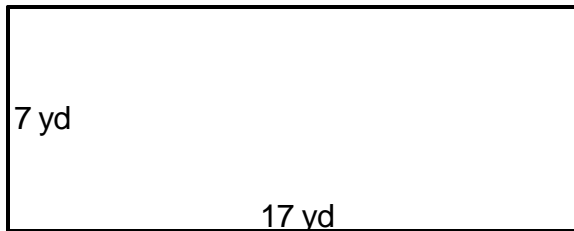
Teacher: _____ Class: _____

Perimeter and Area

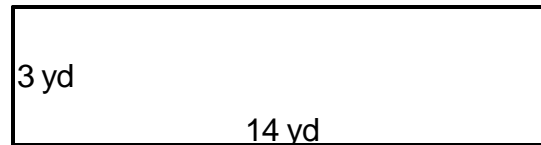
Find the perimeter.



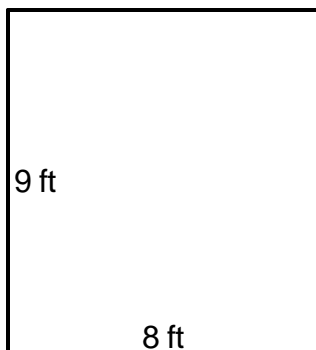
1. _____



4. _____



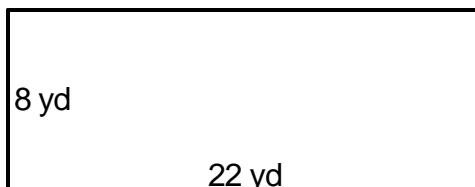
2. _____




5. _____



3. _____



6. _____



Answer Key

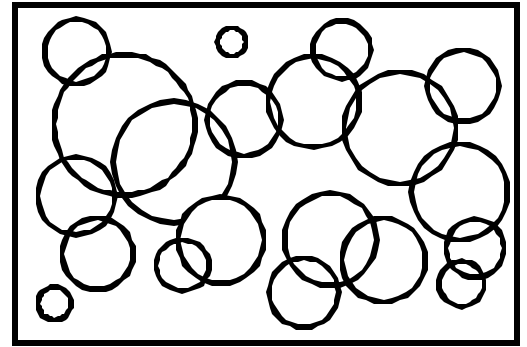
Date: _____

Teacher: _____

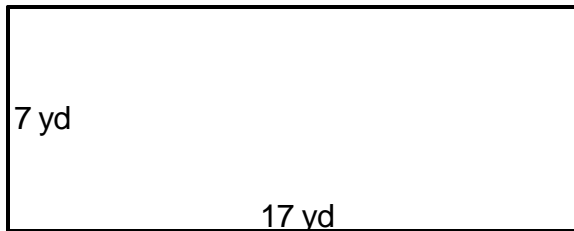
Class: _____

Perimeter and Area

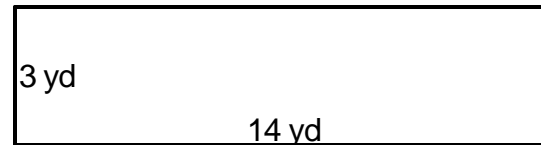
Find the perimeter.



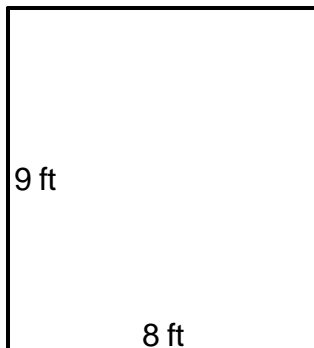
1. $P=48\text{yd}$ _____



4. $P=34\text{yd}$ _____



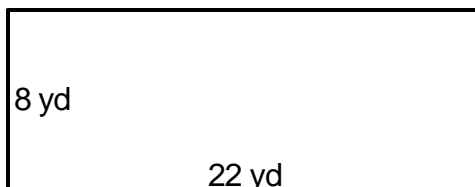
2. $P=34\text{ft}$ _____



5. $P=70\text{ft}$ _____



3. $P=60\text{yd}$ _____



6. $P=36\text{yd}$ _____

