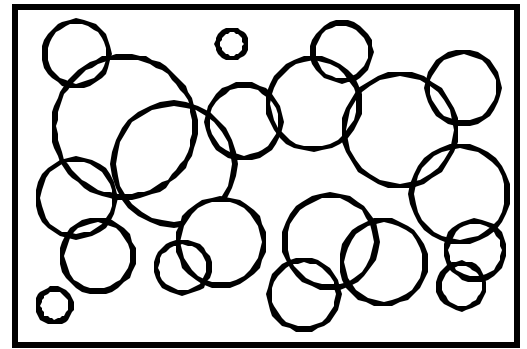


Name: \_\_\_\_\_ Date: \_\_\_\_\_


Teacher: \_\_\_\_\_ Class: \_\_\_\_\_

# Perimeter and Area


Find the perimeter.



1. \_\_\_\_\_




4. \_\_\_\_\_



2. \_\_\_\_\_



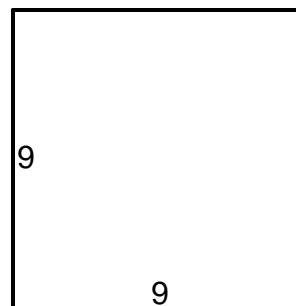
5. \_\_\_\_\_



3. \_\_\_\_\_



6. \_\_\_\_\_



Answer Key

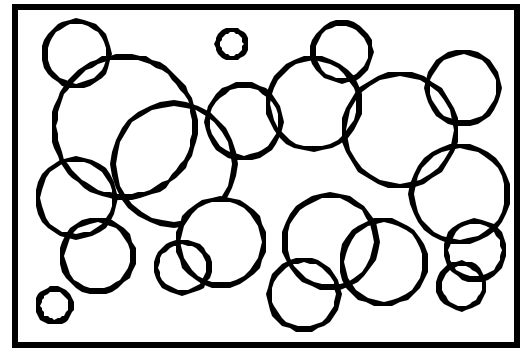
Date: \_\_\_\_\_

Teacher: \_\_\_\_\_

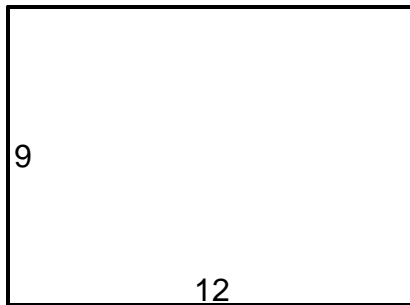
Class: \_\_\_\_\_

# Perimeter and Area


Find the perimeter.



1.  $P=42$  \_\_\_\_\_



4.  $P=62$  \_\_\_\_\_



2.  $P=64$  \_\_\_\_\_



5.  $P=64$  \_\_\_\_\_



3.  $P=40$  \_\_\_\_\_



6.  $P=36$  \_\_\_\_\_

