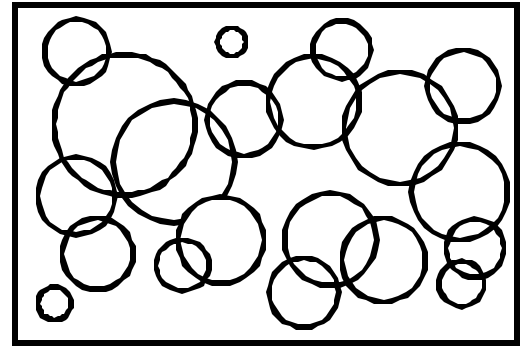


Name: \_\_\_\_\_ Date: \_\_\_\_\_


Teacher: \_\_\_\_\_ Class: \_\_\_\_\_

## Perimeter and Area

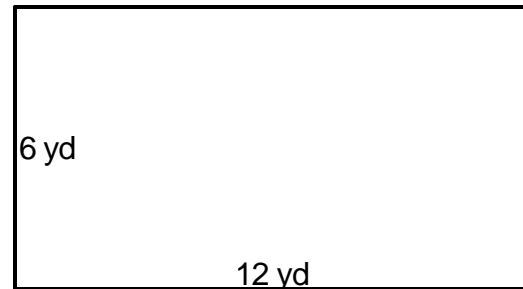
Find the perimeter.



1. \_\_\_\_\_



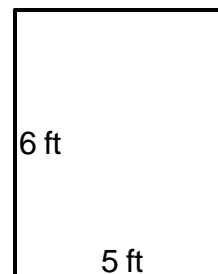
4. \_\_\_\_\_



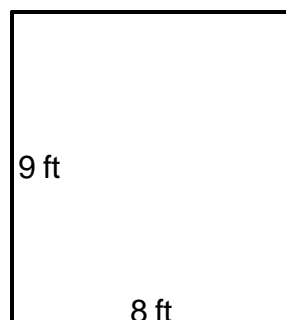
2. \_\_\_\_\_



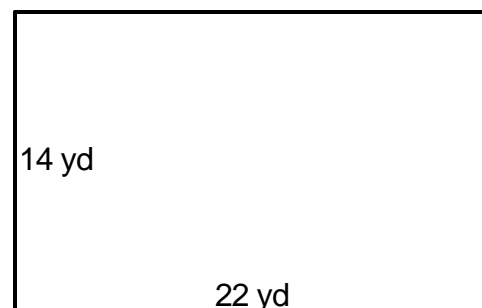
5. \_\_\_\_\_



3. \_\_\_\_\_



6. \_\_\_\_\_



Answer Key

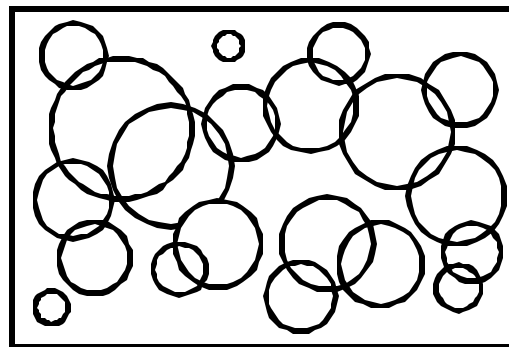
Date: \_\_\_\_\_

Teacher: \_\_\_\_\_


Class: \_\_\_\_\_

## Perimeter and Area


Find the perimeter.



1.  $P=42\text{ft}$  \_\_\_\_\_



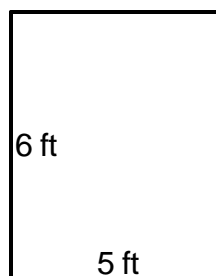
4.  $P=36\text{yd}$  \_\_\_\_\_



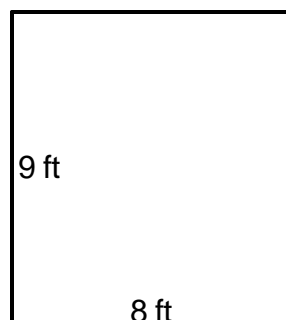
2.  $P=30\text{ft}$  \_\_\_\_\_



5.  $P=22\text{ft}$  \_\_\_\_\_



3.  $P=34\text{ft}$  \_\_\_\_\_



6.  $P=72\text{yd}$  \_\_\_\_\_

