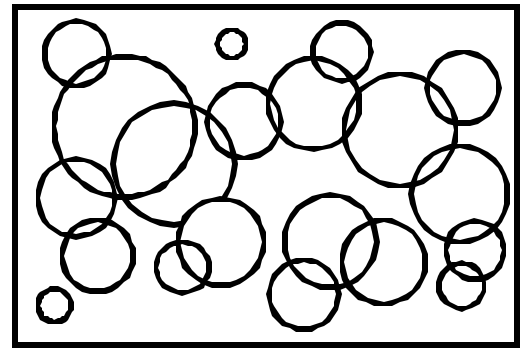


Name: \_\_\_\_\_ Date: \_\_\_\_\_

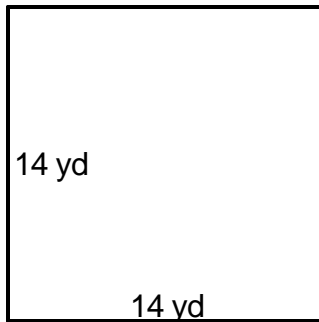
Teacher: \_\_\_\_\_ Class: \_\_\_\_\_

# Perimeter and Area

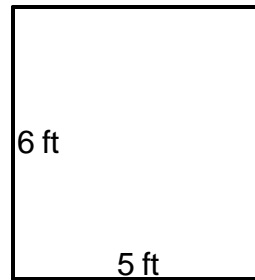
Find the perimeter.



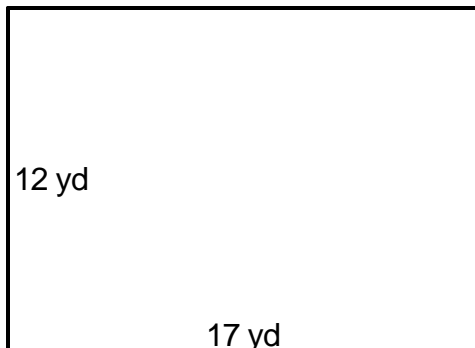
1. \_\_\_\_\_



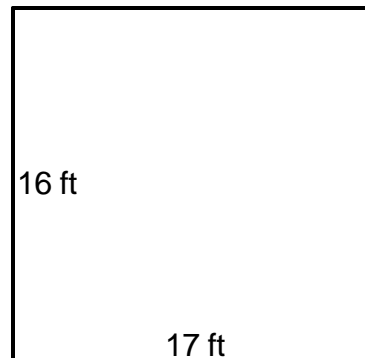
4. \_\_\_\_\_



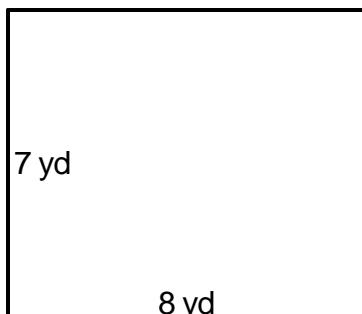
2. \_\_\_\_\_



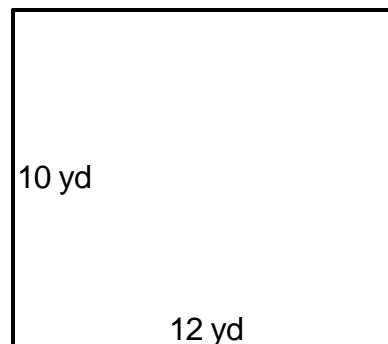
5. \_\_\_\_\_



3. \_\_\_\_\_



6. \_\_\_\_\_



Answer Key

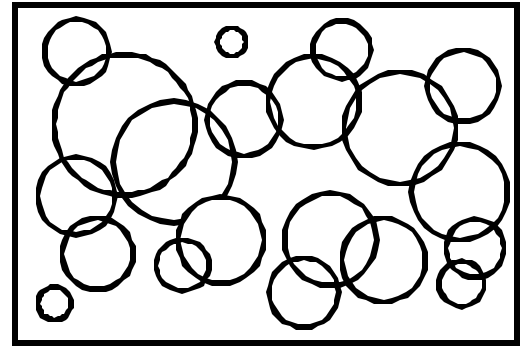
Date: \_\_\_\_\_

Teacher: \_\_\_\_\_

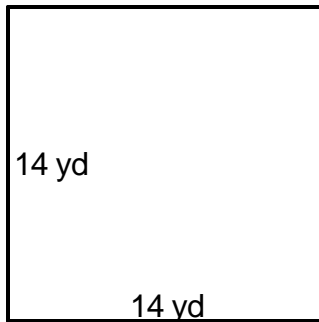
Class: \_\_\_\_\_

# Perimeter and Area

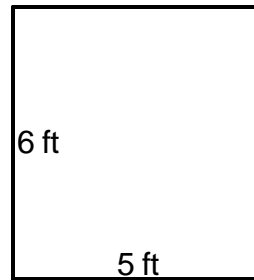
Find the perimeter.



1.  $P=56\text{yd}$  \_\_\_\_\_



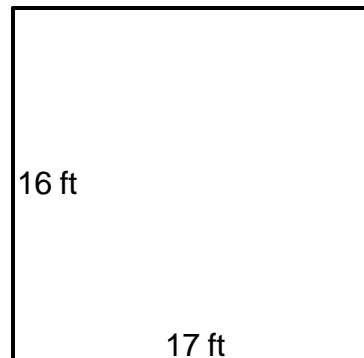
4.  $P=22\text{ft}$  \_\_\_\_\_



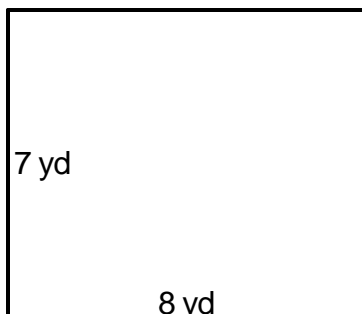
2.  $P=58\text{yd}$  \_\_\_\_\_



5.  $P=66\text{ft}$  \_\_\_\_\_



3.  $P=30\text{yd}$  \_\_\_\_\_



6.  $P=44\text{yd}$  \_\_\_\_\_

